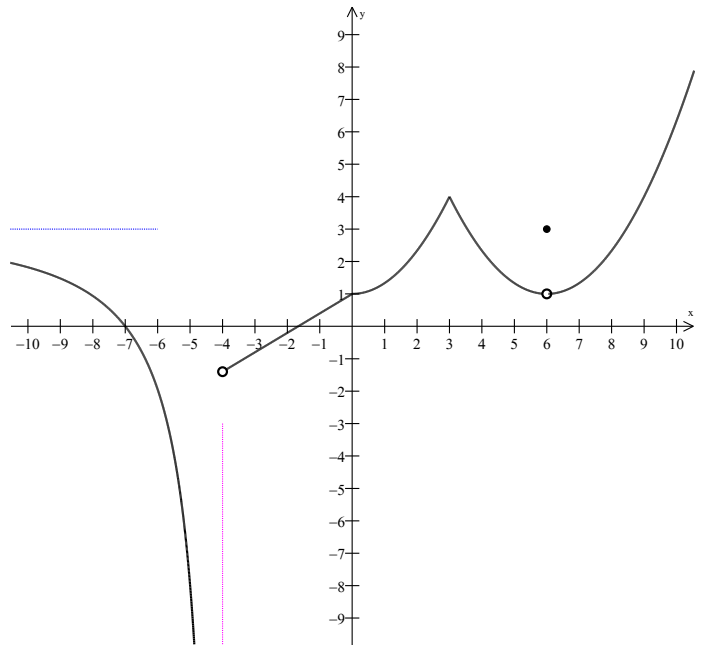


[Marks]

1. Use the graph of the function $f(x)$ to answer each question. Where appropriate use $+\infty$, $-\infty$ or “does not exist”. [3]

- a. $\lim_{x \rightarrow -\infty} f(x) =$
- b. $\lim_{x \rightarrow -4^-} f(x) =$
- c. $\lim_{x \rightarrow -4} f(x) =$
- d. $\lim_{x \rightarrow 6} f(x) =$
- e. $f(6) =$
- f. List the x -value(s) at which the $f(x)$ is continuous but non differentiable



2. Evaluate the following. Where appropriate use $+\infty$, $-\infty$ or “does not exist”.

- a. $\lim_{x \rightarrow -2} \frac{6 - x - 2x^2}{x^2 - 4}$ [2]
- b. $\lim_{x \rightarrow 6} \left(\frac{36 - x^2}{\sqrt{x+3} - \sqrt{x^2 - 27}} \right)$ [3]
- c. $\lim_{x \rightarrow 0^-} \left(\frac{1}{x} - \frac{2}{x^2} \right)$ [2]
- d. $\lim_{x \rightarrow -\infty} \left(\frac{x^2 + 5x - 6}{8x^3 - 27} - 4 \right) =$ [3]

3. Find all the x -values at which $f(x)$ is discontinuous, and determine the type of discontinuity at each value. [5]

$$f(x) = \left\{ \begin{array}{ll} \sqrt{3-x} & \text{if } x < -1 \\ \frac{|2x+1|}{2} & \text{if } -1 \leq x < 1 \\ \frac{-3x}{x^2 - x - 2} & \text{if } x \geq 1 \end{array} \right.$$

4. Let $f(x)$ be a continuous and differentiable function over $[0,3]$. If $f'(x) \leq 2$ for all values of x and $f(0) = 4$. What is the maximum possible value of $f(3)$? [3]
5. Given the function $f(x) = \frac{2}{3-x}$, find $f'(x)$ using the LIMIT DEFINITION of the derivative. [4]
6. Find $\frac{dy}{dx}$ for each of the following:
- a. $y = 4x^3 - \frac{2}{\sqrt[5]{x^3}} - \frac{5^{(3x)}}{2} + \cot(x) - \log_2 x + \frac{e^3}{2}$ [3]
- b. $g(x) = \frac{\tan^2(e^x - 3)}{3x^2 + 5}$ [3]
- c. $y = (x^2 + 1)^{\csc(x)}$ [3]
- d. $y = \ln \left[\frac{\sqrt[4]{x^3 - 2x + 1} (6x - 5)^2}{x^3 (x^2 - 2x)^7} \right]$ [3]
7. The equation of motion of a particle is $s = t^3 - 3t^2$, where s is in meters and t is in seconds. [6]
- Find the velocity and acceleration as functions of t .
 - When is the particle at rest? What is the acceleration at that moment?
 - Find the velocity after 4 s.
 - When is the acceleration zero?
8. Find the 25th derivative of $f(x) = \sin(2x)$ [3]
9. For which values of x does the graph of $y = xe^{2x}$ have a horizontal tangent line? [4]
10. Given the curve $x^3 + y^3 = 9xy$ (folium of Descartes) find the following:
- $\frac{dy}{dx}$ [2]
 - The equation of the normal line to the curve at the point (2,4) [2]
11. 3 meters above the ground a fly is flying horizontally at a rate of 4 meters per minute. It passes over a small rock at noon. How fast is the distance between the fly and the rock increasing one minute later? [5]
12. Given $f(x) = \frac{-1}{x^2 - 1}$, $f'(x) = \frac{2x}{(x^2 - 1)^2}$, $f''(x) = -\frac{2(3x^2 + 1)}{(x^2 - 1)^3}$, find all : [10]
- The x and y intercepts.
 - The vertical and horizontal asymptotes.
 - The interval of increase and decrease.
 - The local (relative) extrema (if any).
 - The interval of upward and downward concavity.
 - The inflection point(s) (if any).
 - On the next page sketch the graph of $f(x)$. Label all intercepts, asymptotes, extrema and points of inflection.

13. Find the absolute extrema of $f(x) = \frac{x^3}{8} - \frac{3x}{2}$ on the closed interval $[-4, 3]$. [4]

14. A cylinder with a closed top must have volume equal to $16\pi m^3$. What is the minimum amount of material (surface area) that can be used? [4]

15. Use differentiation to verify that the following formula is correct: [4]

a. $\int \sec(x) dx = \ln|\sec(x) + \tan(x)| + c$

b. Use the above formula to evaluate $\int_0^{\pi/4} \sec(x) dx$

16. Evaluate the following integrals.

a. $\int_1^2 \frac{(2x-1)^2}{4x} dx$ [3]

b. $\int \frac{x^2 - 9}{x - 3} dx$ [3]

c. $\int \left(\sqrt[5]{x} - \frac{5}{x} + 5^x \right) dx$ [3]

17. Given $f''(x) = 6x - 2\cos(x)$; $f'(0) = -1$ and $f(0) = 4$, find $f(x)$. [3]

18. a) Sketch and shade the region R bounded between the curve $y = 1 + \frac{4}{x}$, the x axis and the lines $x = 1$ and $x = 5$. [6]

b) Find the exact value for the area of that region R

c) Find an approximation for the area of R using a Riemann's sum with 4 equal subintervals and right endpoints.

19. Use the fundamental Theorem of Calculus to find $\frac{d}{dx} \int_x^7 \sqrt{\tan \theta} d\theta$. [1]

Answers

1) a) 3 b) $-\infty$ c) Does Not Exist d) 1 e) 3 f) 0, 3

2) a) $-\frac{7}{4}$ b) $\frac{72}{11}$ c) $-\infty$ d) -4

3) Infinite discontinuity at $x = 2$, and Jump Discontinuity at $x = -1$

4) $f(3) \leq 10$ 5) $\frac{2}{(3-x)^2}$ 6) a) $\frac{dy}{dx} = 12x^2 + \frac{6}{5x^{8/5}} - \frac{3}{2}5^{(3x)} \ln 5 - \csc^2 x - \frac{1}{x \ln 2}$

6) b) $g'(x) = \frac{2e^x(3x^2 + 5)\tan(e^x - 3)\sec^2(e^x - 3) - 6x \tan^2(e^x - 3)}{(3x^2 + 5)^2}$

6)c) $y' = (x^2 + 1)^{\csc x} \left[-\csc x \cot x \ln(x^2 + 1) + \csc x \frac{2x}{x^2 + 1} \right]$

6) d) $y' = \frac{1}{4} \left(\frac{3x^2 - 2}{x^3 - 2x + 1} \right) + \frac{12}{6x - 5} - \frac{3}{x} - \frac{14(x-1)}{x^2 - 2x}$

7) a) $v(t) = 3t^2 - 6t$; $a(t) = 6t - 6$ b) at $t = 0$ s. or $t = 2$ s. $a(0) = -6m/s^2$; $a(t = 2) = 6m/s^2$

c) $v(4) = 24m/s$ d) at $t = 1$ s.

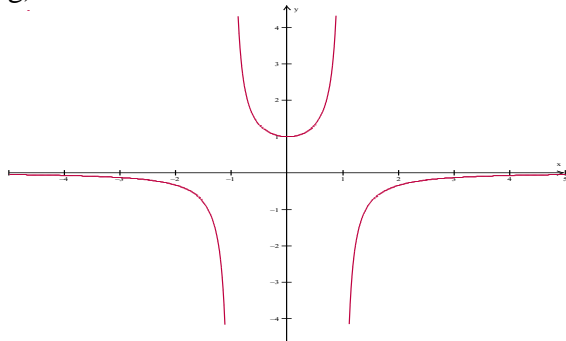
8) $f^{25th}(x) = 2^{25} \cos(2x)$ 9) $x = -\frac{1}{2}$ 10) a) $\frac{dy}{dx} = \frac{3y - x^2}{y^2 - 3x}$ b) $y = -\frac{5}{4}x + \frac{13}{2}$

11) $\frac{16}{5} m/min$ 12) a) (0,1), no x intercept b) vertical Asymptote at $x = \pm 1$; horizontal Asymptote at $y = 0$

c) $f(x)$ increases on $(0, \infty)$, and decreases on $(-\infty, 0)$ d) Local minimum at (0,1)

e) $f(x)$ is concave down on $(-\infty, -1) \cup (1, \infty)$ and concave up on $(-1, 1)$ f) no inflection point

g)



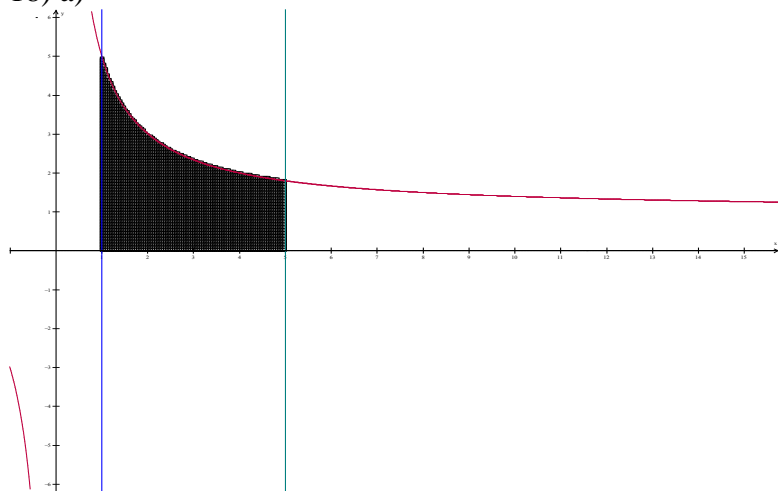
13) absolute max. $(-2, 2)$, absolute min $(-4, -2)$ and $(2, -2)$ 14) $24\pi m^2$

15) a) $\frac{d}{dx} (\ln|\sec x + \tan x| + c) = \frac{\sec x \tan x + \sec^2 x}{\sec x + \tan x} = \sec x \frac{\tan x + \sec x}{\sec x + \tan x} = \sec x$

b) $\ln\left(1 + \frac{2}{\sqrt{2}}\right)$ 16) a) $\frac{1}{4} \ln 2 + \frac{1}{2}$ b) $\frac{x^2}{2} + 3x + c$ c) $\frac{5}{6}x^{6/5} - 5 \ln|x| + \frac{5^x}{\ln 5} + c$

17) $f(x) = x^3 + 2 \cos x - x + 2$

18) a)



b) $4(1 + \ln 5)$

c) $\frac{137}{15}$

19) $-\sqrt{\tan x}$